



## Smartie Fractions



maths on toast  
the family maths charity




How many Smarties in the packet? \_\_\_\_\_  
*This is your denominator (bottom number in your fraction)*




How many do you have of each colour?  
*This is the numerator (top number in your fraction)*  
**Write the number and fraction for each:**


Red




Yellow




Pink




Green




Orange



Purple



Blue



Brown

